

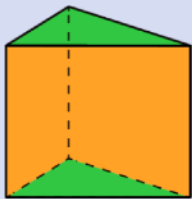
¡¡Hola chicos y chicas!!

Clasificación de prismas y pirámides

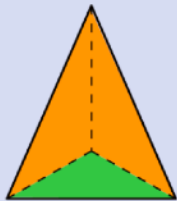
Según sea el polígono de sus bases, los prismas y las pirámides se clasifican en:

Bases: Triángulos.

Prisma triangular

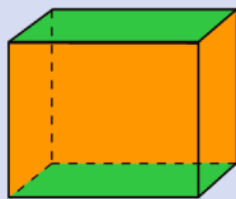


Pirámide triangular

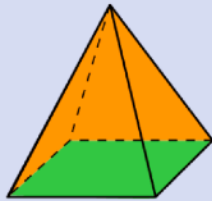


Bases: Cuadriláteros.

Prisma cuadrangular

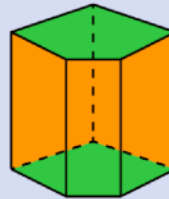


Pirámide cuadrangular

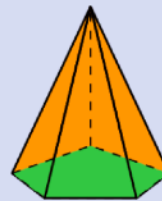


Bases: Pentágonos.

Prisma pentagonal

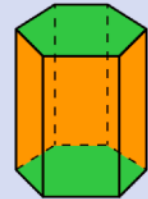


Pirámide pentagonal



Bases: Hexágonos.

Prisma hexagonal

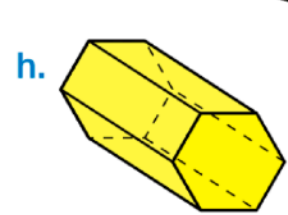
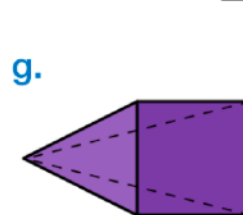
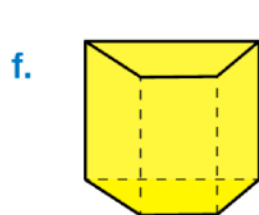
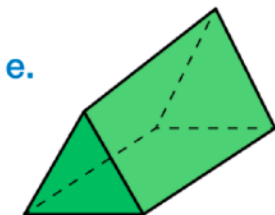
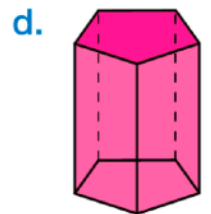
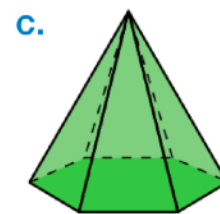
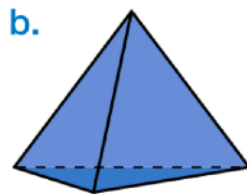
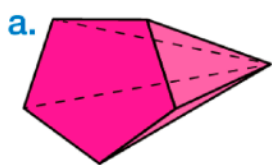


Pirámide hexagonal



Los prismas y las pirámides se clasifican según sea el polígono de sus bases.

Escribe cuál es el polígono de la base de cada cuerpo geométrico y clasifícalos.



UTILIZA ESTA TABLA

FIGURA	BASE	PIRÁMIDE
A	PENTÁGONO	PENTAGONAL
B		
C		
D		
E		
F		
G		
H		